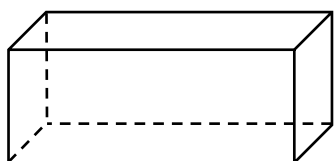


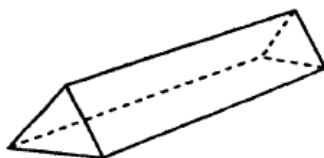
Foundation Check In - 8.06 Three-dimensional shapes

Q1-3. Write down the number of faces, edges and vertices of these three-dimensional shapes.

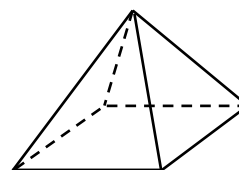
1.



2.



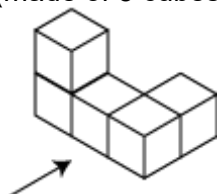
3.



Q4-5. Draw the plan, front and side elevations of these three-dimensional shapes. The front of the shape is marked with an arrow.

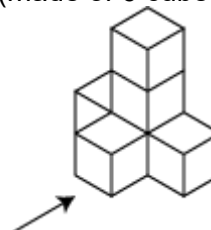
4.

(made of 5 cubes)

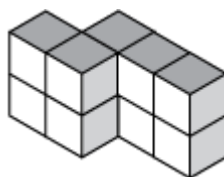


5.

(made of 6 cubes)



6. A prism is drawn below. Explain why you can be sure that you would need 10 cubes to build it, rather than just the 9 you can see.



7. Here are the front elevation, side elevation and plan of a three-dimensional shape made from cubes.

Front



Right side



Plan

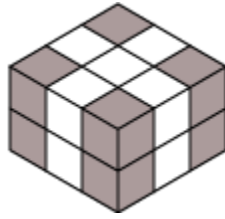


On isometric paper, show that it is possible to construct the three-dimensional shape using both 6 cubes and 7 cubes.

8. A piece of a cube is sliced off with a single straight cut. The new shape has 7 faces, 10 vertices and 15 edges. Describe how the cut could have been made.

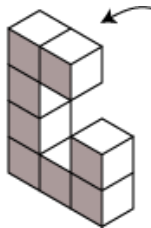


9. The eight shaded cubes that contain the vertices of this cuboid are removed.



How many vertices does the new three-dimensional shape have?

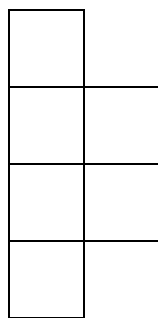
10. This three-dimensional shape sits upright on a table and consists of a single layer of cubes.



The shape is “toppled” in the direction of the arrow and rests so the shaded face is flat against the table. On isometric paper, draw the three-dimensional shape in its toppled position.

Extension

A “hexomino” is a 2D shape made from six connected squares. (Note that the squares are joined edge to edge and there are no overlaps or gaps.)
e.g.



On squared paper, draw some different hexominoes.

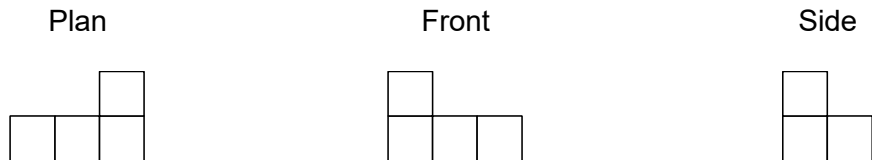
How many different hexominoes are there? Which ones could be folded into a cube?



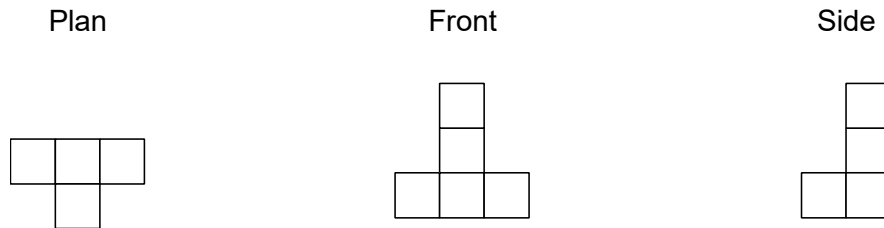
Answers

Question	1	2	3
Vertices	8	6	5
Faces	6	5	5
Edges	12	9	8

4.

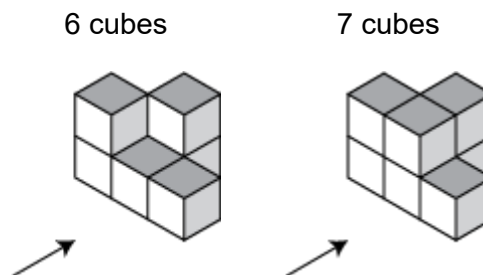


5.



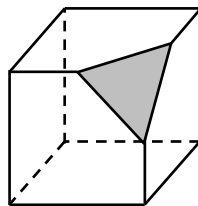
6. The 3D shape is a prism, so it has the same cross-section through its length. Therefore the bottom layer must be the same as the top layer.

7. For example:



The missing/extra cube is hidden from the right, front and plan views and so is optional.

8. The new solid could be made by cutting off a single vertex by slicing through the midpoint of each edge that leads to this vertex.



GCSE (9-1) MATHEMATICS

9. 24 vertices



10.



Extension

There are 35 different hexominoes. Of these, 11 are the net of a cube.

We'd like to know your view on the resources we produce. By clicking on '[Like](#)' or '[Dislike](#)' you can help us to ensure that our resources work for you. When the email template pops up please add additional comments if you wish and then just click 'Send'. Thank you.

If you do not currently offer this OCR qualification but would like to do so, please complete the Expression of Interest Form which can be found here: www.ocr.org.uk/expression-of-interest

OCR Resources: *the small print*

OCR's resources are provided to support the teaching of OCR specifications, but in no way constitute an endorsed teaching method that is required by the Board, and the decision to use them lies with the individual teacher. Whilst every effort is made to ensure the accuracy of the content, OCR cannot be held responsible for any errors or omissions within these resources. We update our resources on a regular basis, so please check the OCR website to ensure you have the most up to date version. This formative assessment resource has been produced as part of our free GCSE teaching and learning support package. All the GCSE teaching and learning resources, including delivery guides, topic exploration packs, lesson elements and more are available on the qualification webpages. If you are looking for examination practice materials, you can find Sample Assessment Materials (SAMs) on the qualification webpage [here](#).

© OCR 2016 - This resource may be freely copied and distributed, as long as the OCR logo and this message remain intact and OCR is acknowledged as the originator of this work.

OCR acknowledges the use of the following content: n/a

Please get in touch if you want to discuss the accessibility of resources we offer to support delivery of our qualifications: resources.feedback@ocr.org.uk



Assessment Objective	Qu.	Topic	R	A	G
AO1	1	Recognise and know the properties of a cuboid			
AO1	2	Recognise and know the properties of a prism			
AO1	3	Recognise and know the properties of a pyramid			
AO1	4	Construct plans and elevations of a simple 3D solid			
AO1	5	Construct plans and elevations of a simple 3D solid			
AO2	6	Know the properties of a prism			
AO2	7	Construct a representation of a 3D solid on isometric paper from plans and elevations			
AO2	8	Know the properties of a cube			
AO3	9	Solve a problem through representation of a 3D solid on isometric paper			
AO3	10	Solve a problem through representation of a 3D solid on isometric paper			

Assessment Objective	Qu.	Topic	R	A	G
AO1	1	Recognise and know the properties of a cuboid			
AO1	2	Recognise and know the properties of a prism			
AO1	3	Recognise and know the properties of a pyramid			
AO1	4	Construct plans and elevations of a simple 3D solid			
AO1	5	Construct plans and elevations of a simple 3D solid			
AO2	6	Know the properties of a prism			
AO2	7	Construct a representation of a 3D solid on isometric paper from plans and elevations			
AO2	8	Know the properties of a cube			
AO3	9	Solve a problem through representation of a 3D solid on isometric paper			
AO3	10	Solve a problem through representation of a 3D solid on isometric paper			

Assessment Objective	Qu.	Topic	R	A	G
AO1	1	Recognise and know the properties of a cuboid			
AO1	2	Recognise and know the properties of a prism			
AO1	3	Recognise and know the properties of a pyramid			
AO1	4	Construct plans and elevations of a simple 3D solid			
AO1	5	Construct plans and elevations of a simple 3D solid			
AO2	6	Know the properties of a prism			
AO2	7	Construct a representation of a 3D solid on isometric paper from plans and elevations			
AO2	8	Know the properties of a cube			
AO3	9	Solve a problem through representation of a 3D solid on isometric paper			
AO3	10	Solve a problem through representation of a 3D solid on isometric paper			

Assessment Objective	Qu.	Topic	R	A	G
AO1	1	Recognise and know the properties of a cuboid			
AO1	2	Recognise and know the properties of a prism			
AO1	3	Recognise and know the properties of a pyramid			
AO1	4	Construct plans and elevations of a simple 3D solid			
AO1	5	Construct plans and elevations of a simple 3D solid			
AO2	6	Know the properties of a prism			
AO2	7	Construct a representation of a 3D solid on isometric paper from plans and elevations			
AO2	8	Know the properties of a cube			
AO3	9	Solve a problem through representation of a 3D solid on isometric paper			
AO3	10	Solve a problem through representation of a 3D solid on isometric paper			



